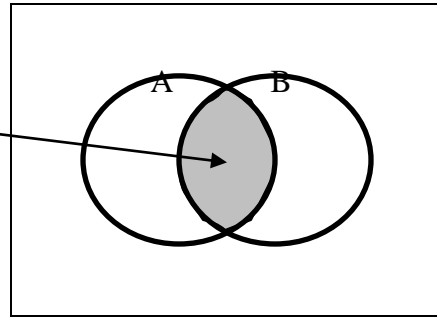


Shade the indicate events:

Example: $A \cap B$



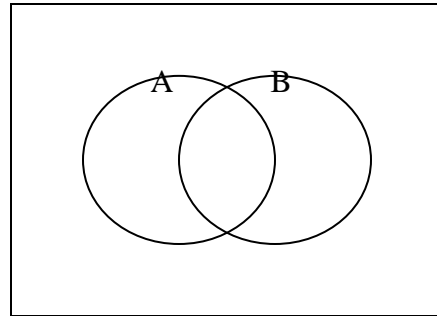
$P(A) = \underline{\hspace{2cm}}$

$P(B) = \underline{\hspace{2cm}}$

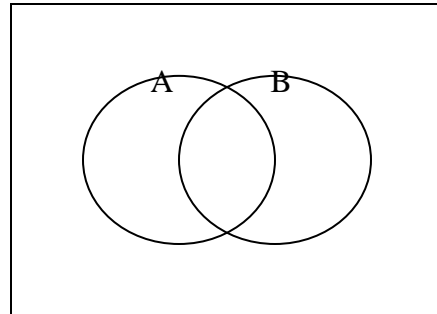
$P(A \cap B) = \underline{\hspace{2cm}}$

Find the probability for the following events.

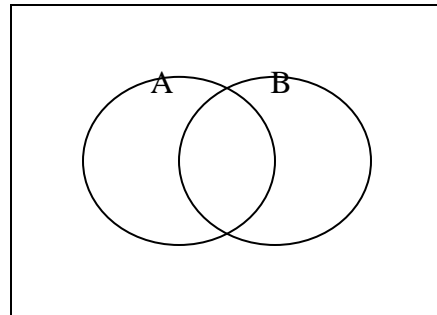
$A' \cap B'$



$A \cup B'$



$(A \cup B)'$



$(A' \cap B)'$

